



Kolbe Academy

1600 F Street, Napa, California 94559 homeinfo@kolbe.org
707-255-6499 707-255-1581 (fax) www.kolbe.org

END OF FIRST GRADE ASSESSMENT

CUMULATIVE

- 1. Reading Assessment: Student Passage**
- 2. English Assessment**
- 3. Spelling Assessment: Answer Sheet**
- 4. Math Assessment**

Student's Name

Date

(EO1G: Student)

About the story: Read this story to find out about Harriet's visit to a friend.

At last Uncle Bill and Harriet and Mom and Dad were at home.

Harriet said, "I'll go to see my friends. All of them have missed me so much. I know they all will want to see me."

"That's a very good idea," said Mom. "Why don't you go see all of them?"

Harriet ran to Pat's house. She ran up to the door. Pat's mom came to see her.

"Is Pat home?" asked Harriet. "He will want to see me. I have been away!"

"No," said Pat's mom. "Pat is not here. He is away right now."

A.M.D.G.

English/Grammar Assessment
(EOG 1)

If the group of words is a sentence, put S before it and the correct punctuation after it. If the group of words is not a sentence, put NS before it.

1. _____ Over the hill and across the field
2. _____ Dogs bark
3. _____ What time is it
4. _____ A happy boy
5. _____ Come to my house
6. _____ Many children at the park
7. _____ How good God is
8. _____ The sky is blue

Circle the words which should begin with a capital letter.

fr. brady	kittens	washington	school
baby	monday	god	friends
june	sam	book	mary

Write a paragraph about an animal on a separate piece of paper.

A.M.D.G.

SPELLING ANSWER SHEET

Name: _____ Date: _____

1. _____ 11. _____

2. _____ 12. _____

3. _____ 13. _____

4. _____ 14. _____

5. _____ 15. _____

6. _____ 16. _____

7. _____ 17. _____

8. _____ 18. _____

9. _____ 19. _____

10. _____ 20. _____

A.M.D.G.
Math Assessment Test - (EO1G)

1.
$$\begin{array}{r} 8 \\ + 7 \\ \hline \end{array}$$

2.
$$\begin{array}{r} 4 \\ + 9 \\ \hline \end{array}$$

3.
$$\begin{array}{r} 16 \\ - 9 \\ \hline \end{array}$$

4.
$$\begin{array}{r} 14 \\ - 6 \\ \hline \end{array}$$

5.
$$\begin{array}{r} 5 \\ 3 \\ + 2 \\ \hline \end{array}$$

6.
$$\begin{array}{r} 4 \\ 2 \\ + 7 \\ \hline \end{array}$$

7. John bought a pencil for 6¢
He bought an eraser for 5¢
How much did he spend in all?

8. Mary had 15¢. She bought a holy card for 10¢. How much does she have left?

9. How many?

00	00	0
00	00	0
00	00	0
00	00	0
00	00	0
00	00	0
00	00	
00	00	
00	00	
00	00	

_____ tens _____ ones

10. Circle the third ball.



11.
$$\begin{array}{r} 17 \\ - 5 \\ \hline \end{array}$$

12.
$$\begin{array}{r} 15 \\ - 8 \\ \hline \end{array}$$

13.
$$\begin{array}{r} 6 \\ + 7 \\ \hline \end{array}$$

14.
$$\begin{array}{r} 9 \\ + 3 \\ \hline \end{array}$$

15. Write the time.



_____:

Write the missing numbers.

16. 66, 67, _____, _____, _____, _____, _____, 73

17. _____, 136, _____, _____, 139, 140, _____

18. 408, _____, _____, 411, _____, _____, 414

19.
$$\begin{array}{r} 38\text{¢} \\ + 27\text{¢} \\ \hline \end{array}$$

20.
$$\begin{array}{r} 35 \\ + 87 \\ \hline \end{array}$$

21.
$$\begin{array}{r} 26 \\ 84 \\ + 37 \\ \hline \end{array}$$

22.
$$\begin{array}{r} 62 \\ - 7 \\ \hline \end{array}$$



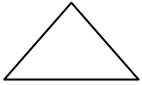

23.
$$\begin{array}{r} 43 \\ - 6 \\ \hline \end{array}$$

24.
$$\begin{array}{r} 86 \\ - 9 \\ \hline \end{array}$$

25.
$$\begin{array}{r} 25\text{¢} \\ - 8\text{¢} \\ \hline \end{array}$$

26. Sam counted the number of cars each boy had. Sam had 4 cars. Chris had 7 cars. Matt had 12 cars. How many in all?

27. Match the shape with its name.



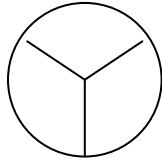
triangle

circle

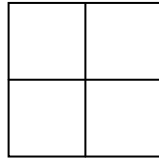
square

rectangle

28. Color $\frac{1}{3}$



29. Color $\frac{3}{4}$



30. Color $\frac{1}{2}$

